


10 Cubes

Use numbers to describe each arrangement of 10 cubes.

NOTE Students use combinations of numbers that equal 10.

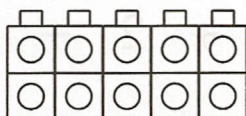
SMH 46

1.

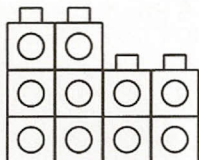


$$3 + 3 + 2 + 2 = 10$$


2.



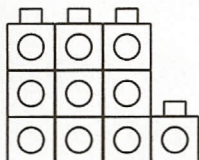
3.



4.



5.



6.

